



**doel 1**

► Je oefent hoeveelheden tot en met 20 opzetten en aflezen op het rekenrek.

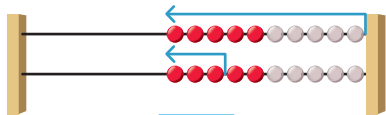
**hulp**

zet op 13.

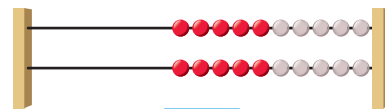
10 boven, 3 onder, samen 13.

**1**

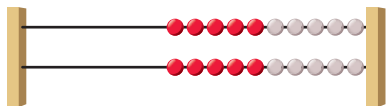
**Hoeveel?**



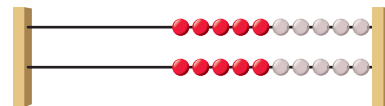
13



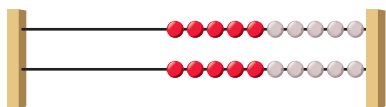
18



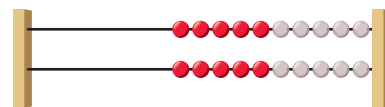
15



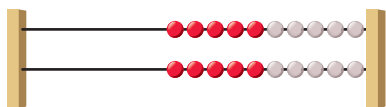
19



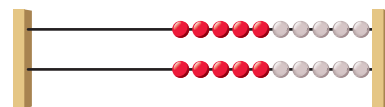
11



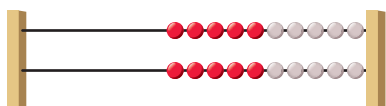
16



12



17



14

**ga verder**



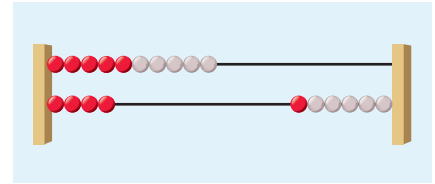


**2**


Wat hoort bij elkaar?



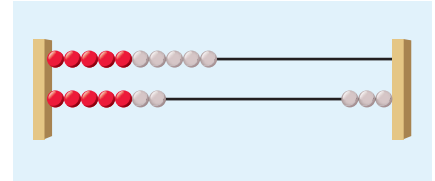
.



.



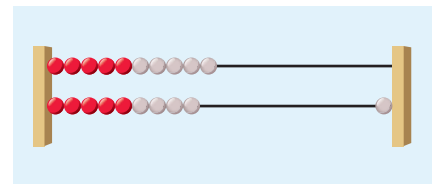
.



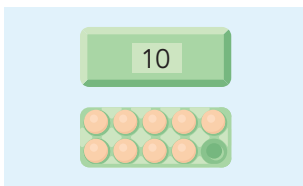
.



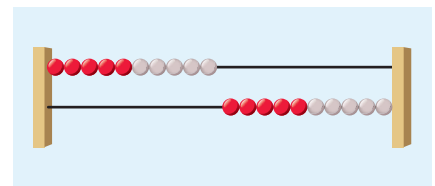
.



.



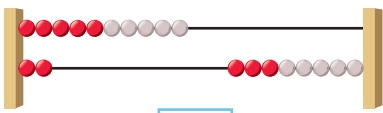
.

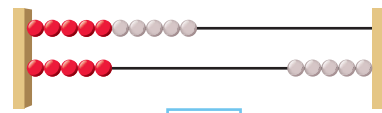


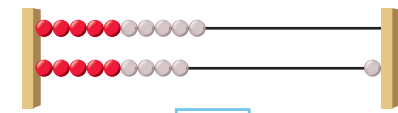
.

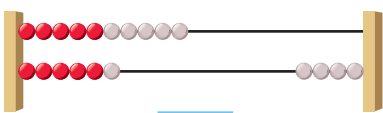
**3**

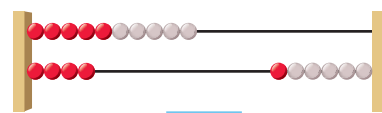
Hoeveel?

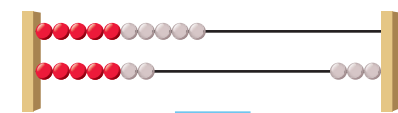


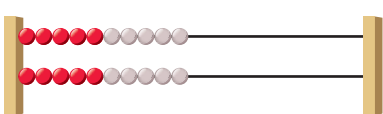


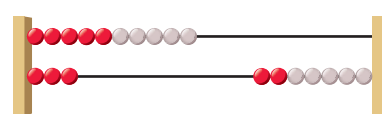


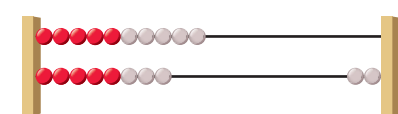












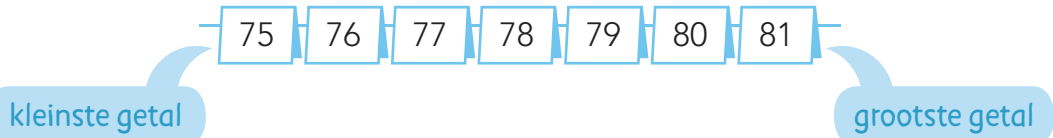

**klaar!**



**doel 2**

- ▶ Je oefent getallen tot en met 100 op volgorde te zetten.
- ▶ Je oefent getallen tot en met 100 te plaatsen op de kaartjesgetallenlijn.

**hulp**



**1**

**Wat is het grootste getal?**

82 28	33 66	42 24	87 78	57 47
59 95	62 53	82 41	38 83	76 67

**2**

**Welk getal?**

35					40					45		
57			60					65				
			73						79			
			83					88				

**ga verder** ➔



3

**Van klein naar groot.**

84 51 67  
95

51 84  
65 39

29  
19 79 81

75 35 57  
53

28 57  
67 82

59  
49 94 44

47 12 73  
92

13 87  
78 46

66  
15 9 77

4

**Welk getal?**

50 51

72 73

61 62

48 49

84 85

96 97

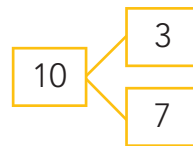
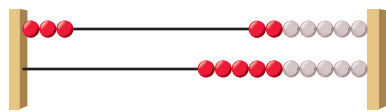
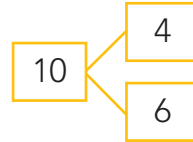
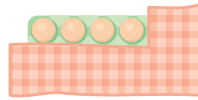
**Klaar!**



**doel 3**

- ▶ Je oefent de splitsing van 10 en weet het antwoord zonder te tellen.
- ▶ Je oefent aanvullen tot en met 10 met de splitsing van 10.

**hulp**



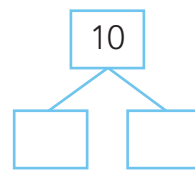
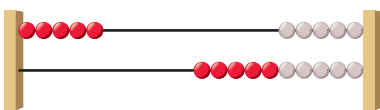
$3 + 7 = 10$

**1**

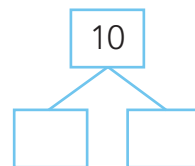
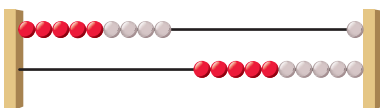
**Splits 10.**

**2**

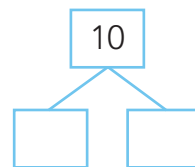
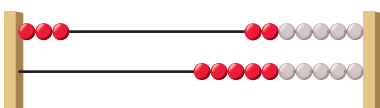
**Splits 10 en maak de sommen.**



$5 + \dots = 10$



$9 + \dots = 10$

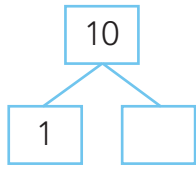


$3 + \dots = 10$

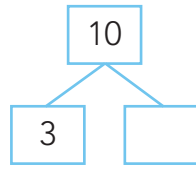
**ga verder** ➔



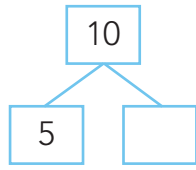
**3 Splits 10 en maak de sommen.**



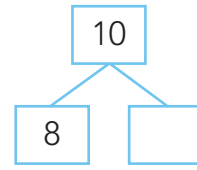
1 + ..... = 10



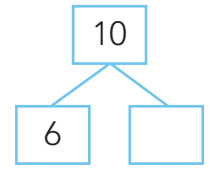
3 + ..... = 10



5 + ..... = 10

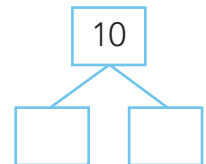
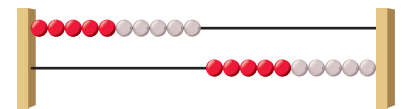
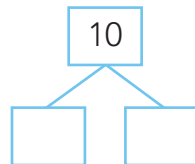
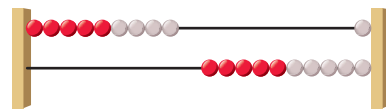
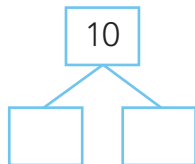
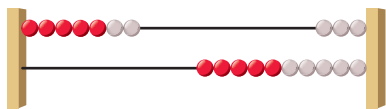
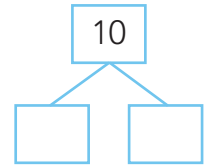
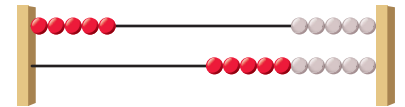
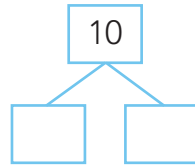
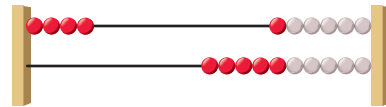
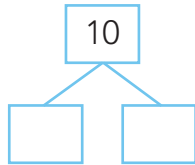
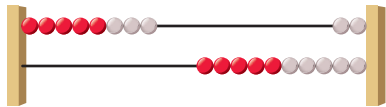


8 + ..... = 10

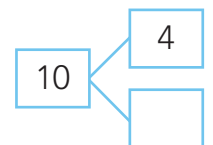
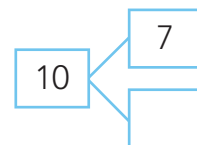
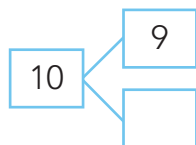
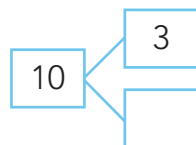
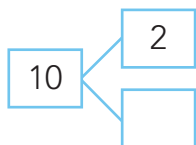
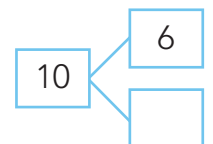
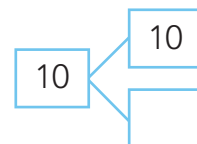
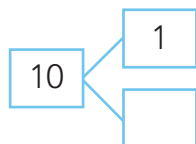
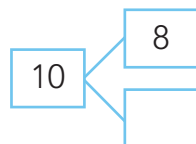
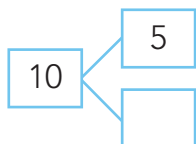
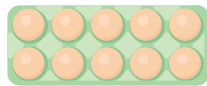


6 + ..... = 10

**4 Splits 10.**



**5 Splits 10.**



**Klaar!**

## doel 4

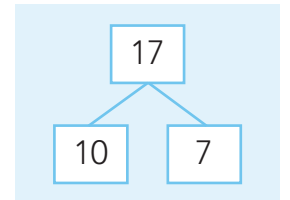
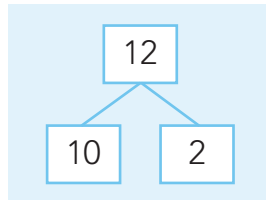
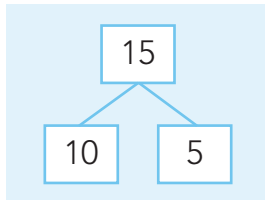
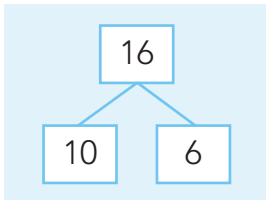


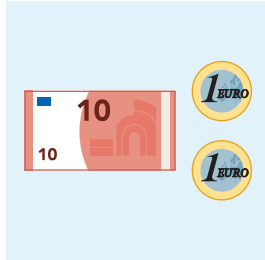
- Je oefent het splitsen van getallen tussen 10 en 20 in een tiental en eenheden.
- Je oefent wat getallen betekenen in een splitschema.

## hulp



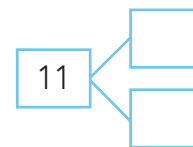
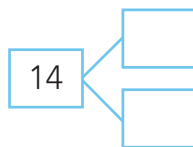
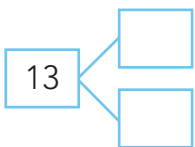
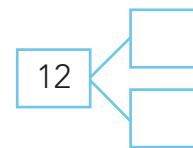
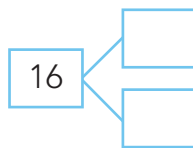
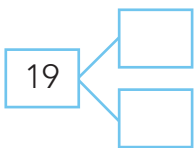
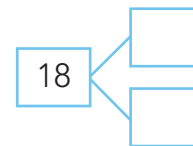
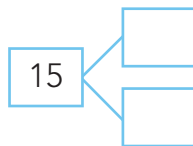
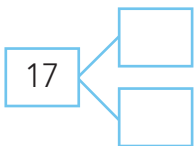
## 1

### Wat hoort bij elkaar?



## 2

### Splits in 10 en de rest.



ga verder





**E** Splits in 10 en de rest.

10

1 EURO 1 EURO 1 EURO 1 EURO 1 EURO

[ ]

[ ] [ ]

10

[ ]

[ ] [ ]

10

1 EURO 1 EURO 1 EURO 1 EURO

[ ]

[ ] [ ]

10

[ ]

[ ] [ ]

10

1 EURO 1 EURO 1 EURO 1 EURO 1 EURO 1 EURO

[ ]

[ ] [ ]

10

[ ]

[ ] [ ]

10

1 EURO

[ ]

[ ] [ ]

10

[ ]

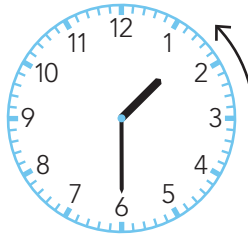
[ ] [ ]

**Klaar!**

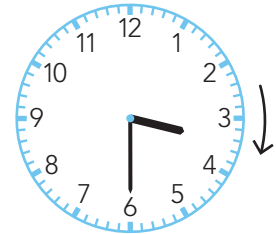
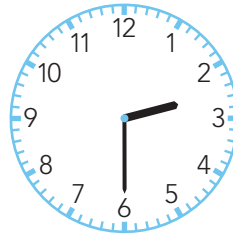


**doel 5**

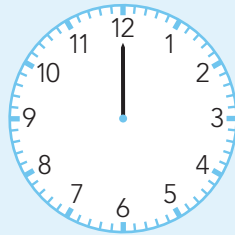
- Je oefent de wijzers van de klok een uur later te zetten.
- Je oefent de wijzers van de klok een uur vroeger te zetten.

**hulp**

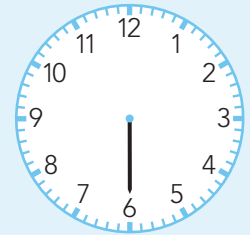
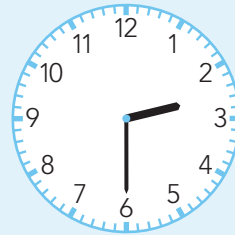
1 uur vroeger




1 uur later

**1****Hoe laat is het?**

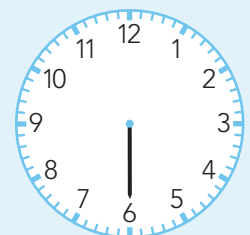
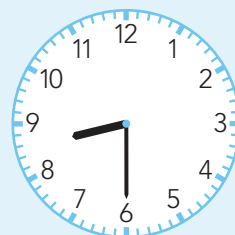
1 uur later



1 uur later



1 uur later



1 uur later

**ga verder**



2

**Hoe laat is het?**

Three clock faces are shown, each with the text "1 uur later" below it. The first clock shows 3:30. The second and third clocks are blank.

Three clock faces are shown, each with the text "1 uur later" below it. The first clock shows 10:00. The second and third clocks are blank.

3

**Hoe laat is het?**

Two clock faces are shown, each with the text "1 uur later" below it. The first clock shows 12:15. The second clock shows 12:00.

Two clock faces are shown, each with the text "1 uur later" below it. The first clock shows 6:15. The second clock shows 6:00.

Two clock faces are shown, each with the text "1 uur vroeger" below it. The first clock shows 12:00. The second clock shows 11:00.

Two clock faces are shown, each with the text "1 uur vroeger" below it. The first clock shows 6:00. The second clock shows 5:00.

**Klaar!**